

Answers and Explanations

1. (b) $\sec x = \operatorname{cosec} y$

$$\Rightarrow \cos x = \sin y$$

$$\Rightarrow \sin\left(\frac{\pi}{2} - x\right) = \sin y$$

$$\Rightarrow y = \frac{\pi}{2} - x$$

$$\Rightarrow x + y = \frac{\pi}{2}$$

$$\therefore \sin(x + y) = \sin \frac{\pi}{2} = 1$$

2. (a) $\tan 1^\circ \cdot \tan 2^\circ \cdot \tan 3^\circ \dots \tan 45^\circ \dots \tan 88^\circ \tan 89^\circ$

$$= \tan(1^\circ \cdot \tan 89^\circ) (\tan 2^\circ \cdot \tan 88^\circ) \dots \tan 45^\circ$$

$$= (\tan 1^\circ \cdot \cot 1^\circ) \cdot (\tan 2^\circ \cdot \cot 2^\circ) \dots$$

$$[\because \tan(90^\circ - \theta) = \cot \theta, \tan \theta \cdot \cot \theta = 1]$$

3. (c) $A + B + C = \pi$

$$\Rightarrow \frac{A+B}{2} = \frac{\pi}{2} - \frac{C}{2}$$

$$\Rightarrow \sin\left(\frac{A+B}{2}\right)$$

$$= \sin\left(\frac{\pi}{2} - \frac{C}{2}\right) = \cos \frac{C}{2}$$

Similarly,

$$\cos\left(\frac{A+B}{2}\right) = \sin \frac{C}{2}$$

$$\cot\left(\frac{A+B}{2}\right) = \tan \frac{C}{2}$$

$$\tan\left(\frac{A+B}{2}\right) = \cot \frac{C}{2}$$

4. (c)

$$(\sec A - \cos A)^2 + (\operatorname{cosec} A - \sin A)^2 - (\cot A - \tan A)^2$$

$$= \sec^2 A + \cos^2 A - 2\sec A \cos A + \operatorname{cosec}^2 A + \sin^2 A - 2\operatorname{cosec} A \sin A - \cot^2 A + 2 \cot A \cdot \tan A$$

$$= \sec^2 A - \tan^2 A + \cos^2 A + \sin^2 A + \operatorname{cosec}^2 A - \cot^2 A - 2$$

$$= 3 - 1 = 1$$

$$\left[\begin{array}{l} \because \sec A \cdot \cos A = 1; \\ \sin A \cdot \operatorname{cosec} A = 1; \\ \tan A \cdot \cot A = 1 \\ \text{etc} \end{array} \right]$$

5. (b) $7 \sin^2 \theta + 3 \cos^2 \theta = 4$

$$\Rightarrow 7 \frac{\sin^2 \theta}{\cos^2 \theta} + 3 = \frac{4}{\cos^2 \theta} = 4 \sec^2 \theta$$

$$\Rightarrow 7 \tan^2 \theta + 3 = 4(1 + \tan^2 \theta)$$

$$\Rightarrow 7 \tan^2 \theta - 4 \tan^2 \theta = 4 - 3$$

$$\Rightarrow \tan^2 \theta = \frac{1}{3}$$

$$\Rightarrow \tan \theta = \frac{1}{\sqrt{3}}$$

6. (a) No. of terms in $1 + 5 + 9 + \dots + 89 = n$

$$\therefore a + (n-1)d = t_n$$

$$\Rightarrow 1 + (n-1)4 = 89$$

$$\Rightarrow (n-1)4 = 89 - 1 = 88$$

$$\Rightarrow n-1 = 22$$

$$\Rightarrow n = 23$$

$$\Rightarrow \text{Now, } \sin^2 1^\circ + \sin^2 89^\circ + \sin^2 5^\circ + \sin^2 85^\circ + \dots + \text{to } 22 \text{ terms} + \sin^2 45^\circ$$

$$= (\sin^2 1^\circ + \cos^2 1^\circ) + (\sin^2 5^\circ + \cos^2 5^\circ) + \dots + \text{to } 11$$

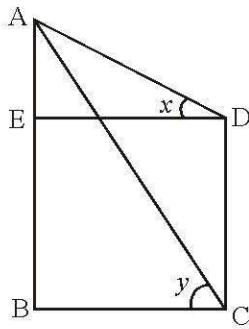
$$\text{terms} + \left(\frac{1}{\sqrt{2}}\right)^2$$

$$= 11 + \frac{1}{2} = 11\frac{1}{2}$$

$$\left[\begin{array}{l} \sin(90^\circ - \theta) = \cos \theta \\ \sin^2 \theta + \cos^2 \theta = 1 \end{array} \right]$$

7. (c)





CD = tree = h metre
 AB = building = a metre
 BC = ED = b metre

∴ From $\triangle AED$,

$$\tan x = \frac{AE}{ED} \Rightarrow \tan x = \frac{a-h}{b}$$

$$\Rightarrow b = (a-h) \cot x \quad \dots(i)$$

From $\triangle ABC$,

$$\tan y = \frac{AB}{BC}$$

$$\Rightarrow \tan y = \frac{a}{b}$$

$$\Rightarrow b = a \cot y \quad \dots(ii)$$

From equations (i) and (ii),

$$(a-h) \cot x = a \cot y$$

$$\Rightarrow a \cot x - h \cot x = a \cot y$$

$$\Rightarrow h \cot x = a (\cot x - \cot y)$$

$$\Rightarrow a = \frac{h \cot x}{\cot x - \cot y}$$

8. (a) $\cot 18^\circ$

$$\left(\cot 72^\circ \cdot \cos^2 22^\circ + \frac{1}{\tan 72^\circ \cdot \sec^2 68^\circ} \right)$$

$$= \cot 18^\circ \cdot \cot 72^\circ \cdot \cos^2 22^\circ + \frac{\cot 18^\circ}{\tan 72^\circ \cdot \sec^2 68^\circ}$$

$$= \cot 18^\circ \cdot \tan 18^\circ \cdot \cos^2 22^\circ + \frac{\cot 18^\circ}{\cot 18^\circ} \cdot \cos^2 68^\circ$$

$$= \cos^2 22^\circ + \cos^2 68^\circ$$

$$= \cos^2 22^\circ + \sin^2 22^\circ = 1$$

$$\left[\begin{array}{l} \because \tan(90^\circ - \theta) = \cot \theta; \\ \sin(90^\circ - \theta) = \cos \theta; \\ \sin^2 \theta + \cos^2 \theta = 1 \end{array} \right]$$

9. (b) $2 \sin^2 \theta + 3 \cos^2 \theta$

$$= 2 \sin^2 \theta + 2 \cos^2 \theta + \cos^2 \theta$$

$$= 2(\sin^2 \theta + \cos^2 \theta) + \cos^2 \theta$$

$$= 2 + \cos^2 \theta$$

∴ Minimum value of $\cos \theta = -1$

∴ Required minimum value = $2 + 1 + 3$

10. (c)

$$\frac{1}{\operatorname{cosec}^2 51^\circ} + \sin^2 39^\circ + \tan^2 51^\circ$$

$$= \frac{1}{\sin^2 51^\circ \cdot \sec^2 39^\circ}$$

$$= \sin^2 51^\circ + \sin^2 39^\circ + \tan^2 (90^\circ - 39^\circ)$$

$$= \frac{1}{\sin^2 (90^\circ - 39^\circ) \cdot \sec^2 39^\circ}$$

$$= \cos^2 39^\circ + \sin^2 39^\circ + \cot^2 39^\circ$$

$$= \frac{1}{\cos^2 39^\circ \cdot \sec^2 39^\circ}$$

[∵ $\sin(90^\circ - \theta) = \cos \theta$, $\tan(90^\circ - \theta) = \cot \theta$]

$$= 1 = \cot^2 39^\circ - 1$$

$$= \operatorname{cosec}^2 39^\circ - 1 = x^2 - 1$$

11. (c) $\tan 4^\circ \cdot \tan 43^\circ \cdot \tan 47^\circ \cdot \tan 86^\circ$

$$= \tan 4^\circ \cdot \tan 43^\circ \cdot \tan (90^\circ - 43^\circ) \cdot \tan (90^\circ - 4^\circ)$$

$$= \tan 4^\circ \cdot \tan 43^\circ \cdot \cot 43^\circ \cdot \cot 4^\circ = 1$$

[$\tan(90^\circ - \theta) = \cot \theta$; $\tan \theta \cdot \cot \theta = 1$]



$$12. (b) \frac{\tan \theta + \cot \theta}{\tan \theta - \cot \theta} = \frac{2}{1}$$

By componendo and dividendo,

$$\frac{2 \tan \theta}{2 \cot \theta} = \frac{3}{1}$$

$$\Rightarrow \frac{\sin \theta}{\cos \theta} \cdot \frac{\sin \theta}{\cos \theta} = 3$$

$$\Rightarrow \sin^2 \theta = 3 \cos^2 \theta$$

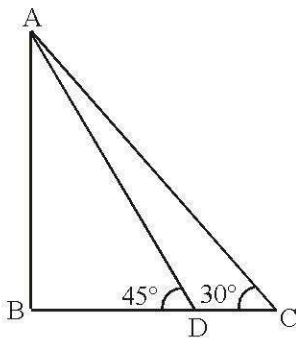
$$\Rightarrow \sin^2 \theta = 3(1 - \sin^2 \theta)$$

$$\Rightarrow 4 \sin^2 \theta = 3$$

$$\Rightarrow \sin^2 \theta = \frac{3}{4}$$

$$\Rightarrow \sin \theta = \frac{\sqrt{3}}{2}$$

13. (d)



Let AB be a pillar of height h metre.

If BC = length of shadow = x , then

BD = $(x + 20)$ metre

From $\triangle ABC$,

$$\tan 45^\circ = \frac{h}{x} \Rightarrow h = x \quad \dots(i)$$

From $\triangle ABD$,

$$\tan 30^\circ = \frac{AB}{AD} \Rightarrow \frac{1}{\sqrt{3}} = \frac{h}{x + 20}$$

$$\Rightarrow \frac{1}{\sqrt{3}} = \frac{h}{h + 20} \Rightarrow \sqrt{3}h = h + 20$$

$$\Rightarrow (\sqrt{3} - 1)h = 20 \Rightarrow h = \frac{20}{\sqrt{3} - 1}$$

$$= \frac{20}{\sqrt{3} - 1} \times \frac{\sqrt{3} + 1}{\sqrt{3} + 1}$$

$$= \frac{20(\sqrt{3} + 1)}{2} = 10(\sqrt{3} + 1) \text{ metre}$$

14. (b) When $\theta = 0^\circ$

$$\sin^2 \theta + \cos^4 \theta = 1$$

When $\theta = 45^\circ$,

$$\sin^2 \theta + \cos^4 \theta = \frac{1}{2} + \frac{1}{4} = \frac{3}{4}$$

When $\theta = 30^\circ$

$$\sin^2 \theta + \cos^4 \theta = \frac{1}{4} + \frac{9}{16} = \frac{13}{16}$$

15. (d) $\sin \theta + \operatorname{cosec} \theta = 2$

$$\Rightarrow \sin \theta + \frac{1}{\sin \theta} = 2$$

$$\Rightarrow \sin^2 \theta - 2 \sin \theta + 1 = 0$$

$$\Rightarrow (\sin \theta - 1)^2 = 0 \Rightarrow \sin \theta = 1$$

$$\therefore \sin^5 \theta + \operatorname{cosec}^5 \theta = 1 + 1 = 2$$

16. (d) $\sin \theta = \cos(90^\circ - \theta)$;

$$\sin(90^\circ - \theta) = \cos \theta$$

$$\therefore \sin 85^\circ = \sin(90^\circ - 5^\circ) = \cos 5^\circ$$

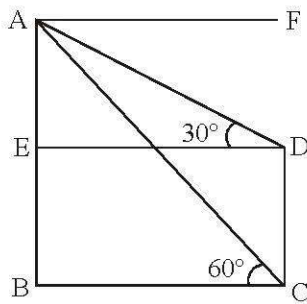
$$\therefore (\sin^2 5^\circ + \sin^2 85^\circ) + (\sin^2 10^\circ + \sin^2 80^\circ) + \dots$$

$$\text{to terms } + \sin^2 45^\circ + \sin^2 90^\circ$$

$$= 8 \times 1 + \frac{1}{2} + 1 = 9\frac{1}{2}$$

17. (b)





AB = 108 m

CD = x metre

From $\triangle ABC$,

$$\tan 60^\circ = \frac{AB}{BC}$$

$$\Rightarrow \sqrt{3} \frac{108}{BC}$$

$$\Rightarrow BC = \frac{108}{\sqrt{3}} = 36\sqrt{3} \text{ m}$$

From $\triangle AED$,

$$\tan 30^\circ = \frac{AE}{ED}$$

$$\Rightarrow \frac{1}{\sqrt{3}} = \frac{108 - x}{36\sqrt{3}}$$

$$\Rightarrow 108 - x = 36$$

$$\Rightarrow x = 108 - 36 = 72 \text{ m}$$

18. (c) $\tan 2\theta = \frac{1}{\tan 4\theta} = \cot 4\theta$

$$\Rightarrow \tan 2\theta = \tan(90^\circ - 4\theta)$$

$$\Rightarrow 2\theta = 90^\circ - 4\theta$$

$$\Rightarrow 6\theta = 90^\circ \Rightarrow \theta = 15^\circ$$

$$\therefore \tan 3\theta = \tan 45^\circ = 1$$

19. (c) $2 \cos \theta - \sin \theta = \frac{1}{\sqrt{2}}$

$$2\sin\theta + \cos\theta = x \text{ (Let)}$$

$$4\cos^2\theta + \sin^2\theta - 4\sin\theta \cdot \cos\theta + 4\sin^2\theta + \cos^2\theta +$$

$$4\sin\theta \cdot \cos\theta$$

$$= \frac{1}{2} + x^2$$

$$\Rightarrow 4(\cos^2\theta + \sin^2\theta) + (\cos^2\theta + \sin^2\theta) = \frac{1}{2} + x^2$$

$$\Rightarrow \frac{1}{2} + x^2 = 5$$

$$\Rightarrow x^2 = 5 - \frac{1}{2} = \frac{9}{2} \Rightarrow x = \frac{3}{\sqrt{2}}$$

20. (c) $\frac{\sin \theta + \cos \theta}{\sin \theta - \cos \theta} = 3$

$$\Rightarrow \sin \theta + \cos \theta = 3\sin \theta - 3\cos \theta$$

$$\Rightarrow 4\sin \theta = 2\cos \theta \Rightarrow \tan \theta = 2$$

$$\therefore \sin^4 \theta - \cos^4 \theta$$

$$= (\sin^2 \theta + \cos^2 \theta)(\sin^2 \theta - \cos^2 \theta)$$

$$= \sin^2 \theta - \cos^2 \theta$$

$$= \cos^2 \theta (\tan^2 \theta - 1)$$

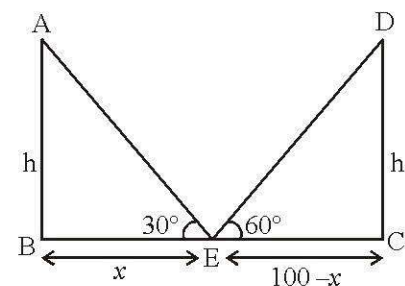
$$= \frac{\tan^2 \theta - 1}{1 + \tan^2 \theta} = \frac{4 - 1}{1 + 4} = \frac{3}{5}$$

21. (c) $(\tan 1^\circ \cdot \tan 89^\circ) \cdot (\tan 2^\circ \cdot \tan 88^\circ) \dots \tan 45^\circ$

$$= (\tan 1^\circ \cdot \cot 1^\circ) (\tan 2^\circ \cdot \cot 2^\circ) \dots 1$$

$$= 1 \left[\begin{array}{l} \because \tan(90^\circ - \theta) = \cot \theta \\ \cot(90^\circ - \theta) = \tan \theta, \\ \tan \theta \cdot \cot \theta = 1 \end{array} \right]$$

22. (a)



AB = CD = h metre (Height of pole)



From $\triangle ABE$,

$$\tan 30^\circ = \frac{h}{x}$$

$$\frac{1}{\sqrt{3}} = \frac{h}{x} \Rightarrow \sqrt{3}h = x \quad \dots(i)$$

From $\triangle DEC$,

$$\tan 60^\circ = \frac{h}{100 - x}$$

$$\Rightarrow \sqrt{3} = \frac{h}{100 - x}$$

$$\Rightarrow \sqrt{3}(100 - x) = h$$

$$\Rightarrow \sqrt{3}(100 - \sqrt{3}h) = h$$

[From equation (i)]

$$\Rightarrow 100\sqrt{3} - 3h = h \Rightarrow 4h = 100\sqrt{3}$$

$$\Rightarrow h = 25\sqrt{3} \text{ metre}$$

23. (a) $\sec^2 \theta + \tan^2 \theta = 7$

$$\Rightarrow 1 + \tan^2 \theta + \tan^2 \theta = 7$$

$$\Rightarrow 2\tan^2 \theta = 7 - 1 = 6$$

$$\Rightarrow \tan^2 \theta = 3 \Rightarrow \tan \theta = \sqrt{3}$$

$$\Rightarrow \theta = 60^\circ$$

24. (d)

$$\frac{\sin 39^\circ}{\cos 51^\circ} + 2 \tan 11^\circ \cdot \tan 79^\circ \cdot \tan 31^\circ \cdot \tan 59^\circ \cdot \tan 45^\circ$$

$$-3(\sin^2 21^\circ + \sin^2 69^\circ)$$

$$= \frac{\sin 39^\circ}{\cos(90^\circ - 39^\circ)} + 2 \tan 11^\circ$$

$$\tan(90^\circ - 11^\circ) \cdot \tan 31^\circ \cdot \tan(90^\circ - 59^\circ)$$

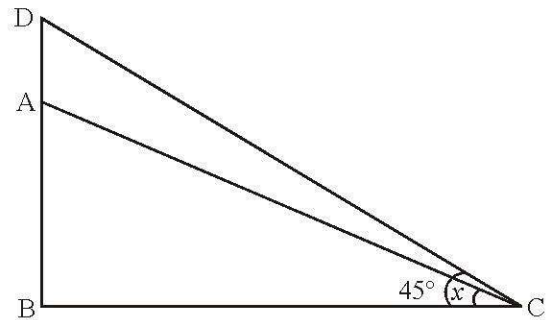
$$1 - 3(\sin^2 21^\circ + \sin^2(90^\circ - 21^\circ))$$

$$= \frac{\sin 39^\circ}{\sin 39^\circ} + 2 \tan 11^\circ \cdot \cot 11^\circ \cdot \tan 31^\circ \cdot \cot 31^\circ -$$

$$3(\sin^2 21^\circ + \cos^2 21^\circ) = 1 + 2 - 3 = 0$$

$$[\tan \theta \cdot \cot \theta = 1, \sin^2 \theta + \cos^2 \theta = 1]$$

25. (b)



AB = Building = h metre

AD = Chimney = y metre

From $\triangle BCD$,

$$\tan 45^\circ = \frac{BD}{BC} \Rightarrow 1 = \frac{h + y}{BC}$$

$$\Rightarrow BC = h + y \quad \dots(i)$$

From $\triangle ABC$,

$$\tan x = \frac{AB}{BC}$$

$$\Rightarrow \tan x = \frac{h}{BC}$$

$$\Rightarrow BC = h \cot x \quad \dots(ii)$$

From equations (i) and (ii), $h + y = h \cot x$

$$\Rightarrow y = (h \cot x - h) \text{ metre}$$

26. (c) $\frac{\cos^2 \theta}{\cot^2 \theta - \cos^2 \theta} = 3$

$$\Rightarrow \cos^2 \theta = 3 \cot^2 \theta - 3 \cos^2 \theta$$

$$\Rightarrow 4 \cos^2 \theta = 3 \cot^2 \theta = 3 \frac{\cos^2 \theta}{\sin^2 \theta}$$

$$\Rightarrow 4 \cos^2 \theta - \frac{3 \cos^2 \theta}{\sin^2 \theta} = 0$$



$$\Rightarrow \cos^2 \theta \left(4 - \frac{3}{\sin^2 \theta} \right) = 0$$

$$\therefore 4 - \frac{3}{\sin^2 \theta} = 0$$

$$\Rightarrow 4\sin^2 \theta = 3$$

$$\Rightarrow \sin \theta = \frac{\sqrt{3}}{2} = \sin 60^\circ$$

$$\Rightarrow \theta = 60^\circ$$

$$\cos^2 \theta = 0 \Rightarrow \theta = 90^\circ$$

27. (c) $A = \tan 11^\circ \cdot \tan 29^\circ$

$$B = 2 \cot 61^\circ \cdot \cot 79^\circ$$

$$= 2 \cot(90^\circ - 29^\circ) \cot(90^\circ - 11^\circ)$$

$$= 2 \tan 29^\circ \cdot \tan 11^\circ \quad [\because \cot(90^\circ - \theta) = \tan \theta]$$

$$= 2A$$

28. (b) $\cos^2 \alpha + \cos^2 \beta = 2$

$$\Rightarrow 1 - \sin^2 \alpha + 1 - \sin^2 \beta = 2$$

$$\Rightarrow \sin^2 \alpha + \sin^2 \beta = 0$$

$$\Rightarrow \sin \alpha = \sin \beta = 0$$

$$\Rightarrow \alpha = \beta = 0$$

$$\therefore \tan^3 \alpha + \sin^5 \beta = 0$$

29. (b) $\tan(2\theta + 45^\circ) = \cot 3\theta$

$$= \tan(90^\circ - 3\theta)$$

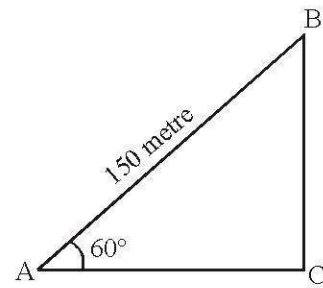
$$\Rightarrow 2\theta + 45^\circ = 90^\circ - 3\theta$$

$$\Rightarrow 5\theta = 90^\circ - 45^\circ = 45^\circ$$

$$\therefore \theta = 9^\circ$$

30. (b) $AB = \text{Length of the thred} = 150 \text{ metre}$

$$\angle BAC = 60^\circ$$



In $\triangle ABC$,

$$\sin 60^\circ = \frac{BC}{AB} \Rightarrow \frac{\sqrt{3}}{2} = \frac{BC}{150}$$

$$\Rightarrow BC = 150 \times \frac{\sqrt{3}}{2} = 75\sqrt{3} \text{ metre}$$

31. (b) $\cos \theta = \frac{15}{17}$

$$\Rightarrow \sec \theta = \frac{1}{\cos \theta} = \frac{17}{15}$$

$$\therefore \cot(90^\circ - \theta) = \tan \theta$$

$$= \sqrt{\sec^2 \theta - 1}$$

$$= \sqrt{\left(\frac{17}{15}\right)^2 - 1} = \sqrt{\frac{289}{225} - 1}$$

$$= \sqrt{\frac{289 - 225}{225}} = \sqrt{\frac{64}{225}} = \frac{8}{15}$$

32. (a) $\sec^2 \theta - \tan^2 \theta = 1$

$$\sec^2 \theta + \tan^2 \theta = \frac{7}{12}$$

$$\therefore \sec^4 \theta - \tan^4 \theta$$

$$= (\sec^2 \theta - \tan^2 \theta) (\sec^2 \theta + \tan^2 \theta)$$

33. (a) $\cos x + \cos y = 2$

$$\because \cos x \leq 1$$

$$\Rightarrow \cos x = 1; \cos y = 1$$

$$\Rightarrow x = y = 0^\circ$$



$$\therefore \sin x = \sin y = 0$$

$$\begin{aligned} 34. \quad (a) \quad & \tan 15^\circ \cdot \cot 75^\circ + \tan 75^\circ \cdot \cot 15^\circ \\ &= \tan 15^\circ \cdot \cot(90^\circ - 15^\circ) + \tan(90^\circ - 15^\circ) \cdot \cot 15^\circ \\ &= \tan^2 15^\circ + \cot^2 15^\circ \quad \dots\dots(i) \end{aligned}$$

$$\left[\begin{array}{l} \because \tan(90^\circ - \theta) = \cot \theta \\ \cot(90^\circ - \theta) = \tan \theta \end{array} \right]$$

$$\tan 15^\circ = 2 - \sqrt{3}$$

$$\therefore \cot 15^\circ$$

$$= \frac{1}{2 - \sqrt{3}} = \frac{2 + \sqrt{3}}{(2 - \sqrt{3})(2 + \sqrt{3})}$$

$$= 2 + \sqrt{3}$$

$$\therefore \tan^2 15^\circ + \cot^2 15^\circ$$

$$= (2 - \sqrt{3})^2 + (\sqrt{3} + 2)^2$$

$$= 2(4 + 3) = 14$$

$$35. \quad (b) \quad \tan \theta + \cot \theta = 2$$

$$\Rightarrow \tan \theta + \frac{1}{\tan \theta} = 2$$

$$\Rightarrow \tan^2 \theta + 1 = 2 \tan \theta$$

$$\Rightarrow \tan^2 \theta - 2 \tan \theta + 1 = 0$$

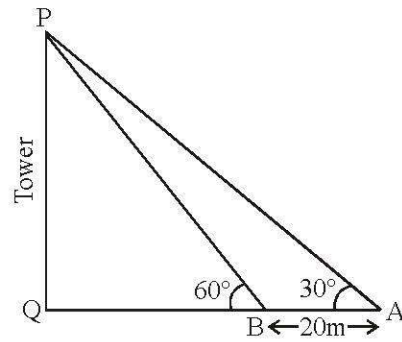
$$\Rightarrow (\tan \theta - 1)^2 = 0$$

$$\Rightarrow \tan \theta = 1$$

$$\Rightarrow \cot \theta = 1$$

$$\therefore \tan^5 \theta + \cot^{10} \theta = 1 + 1 = 2$$

$$36. \quad (c)$$



Let $PQ = h$ metre and $BQ = x$ metre.

From ΔAPQ ,

$$\tan 30^\circ = \frac{h}{x + 20}$$

$$\Rightarrow \frac{1}{\sqrt{3}} + \frac{h}{x} = 20$$

$$\Rightarrow \sqrt{3}h = x + 20 \quad \dots(i)$$

From ΔPQB ,

$$\tan 60^\circ = \frac{PQ}{BQ} = \frac{h}{x}$$

$$\Rightarrow \sqrt{3} = \frac{h}{x} \Rightarrow h = \sqrt{3}x$$

$$\Rightarrow x = \frac{1}{\sqrt{3}}h \quad \dots(ii)$$

$$\therefore \sqrt{3}h = \frac{1}{\sqrt{3}}h + 20$$

[From equation (i) and (ii)]

$$\Rightarrow 3h - h = 20\sqrt{3}$$

$$\Rightarrow 2h = 20\sqrt{3}$$

$$\therefore h = 10\sqrt{3} \text{ metre}$$

$$37. \quad (a) \quad \sin \theta - \cos \theta = \frac{7}{13} \quad \dots(i)$$

$$\sin \theta + \cos \theta = x \quad \dots(ii)$$

On squaring both equations and adding,



$$2(\sin^2 \theta + \cos^2 \theta) = \frac{49}{169} + x^2$$

$$\Rightarrow x^2 = 2 - \frac{49}{169} = \frac{338 - 49}{169}$$

$$= \frac{289}{169} \Rightarrow x = \frac{17}{13}$$

$$\Rightarrow \sin^2 \theta - 2 \sin \theta + 1 = 0$$

$$\Rightarrow (\sin \theta - 1) = 0$$

$$\Rightarrow \sin \theta = 1 \Rightarrow \operatorname{cosec} \theta = 1$$

$$\therefore \sin^{100} \theta + \operatorname{cosec}^{100} \theta = 1 + 1 = 2$$

38. (d) $\sin(2x - 20^\circ) = \cos(2y + 20^\circ)$

$$\Rightarrow \sin(2x - 20^\circ) = \sin(90^\circ - 2y - 20^\circ)$$

$$\Rightarrow 2x - 20^\circ = 70^\circ - 2y$$

$$\Rightarrow 2x + 2y = 70 + 20 = 90^\circ$$

$$\Rightarrow x + y = 45^\circ$$

$$\therefore \tan(x = y) = \tan 45^\circ = 1$$

39. (b) Let the number of terms be n , then

$$\text{By } t_n = a + (n-1)d \quad 85 = 5 + (n-1)$$

$$\Rightarrow n-1 = 85 - 5 = 80$$

$$\Rightarrow n = 81$$

$$\therefore \sin^2 5^\circ + \sin^2 6^\circ + \dots + \sin^2 45^\circ + \dots$$

$$+ \sin^2 85^\circ + \sin^2 85^\circ$$

$$= (\sin^2 5^\circ \sin^2 85^\circ) + (\sin^2 6^\circ + \dots +$$

$$\sin^2 84^\circ) + \dots + \text{to 40 terms} + \sin^2 45^\circ$$

$$= (\sin^2 5^\circ + \cos^2 5^\circ) + (\sin^2 6^\circ + \dots$$

$$+ \cos^2 6^\circ) + \dots + \text{to 40 terms} + \sin^2 45^\circ$$

$$\left[\begin{array}{l} \sin(90^\circ - \theta) = \cos \theta \\ \sin^2 \theta + \cos^2 \theta = 1 \end{array} \right]$$

$$= 40 + \frac{1}{2} = 40 \frac{1}{2}$$

40. (b) $\sin \theta + \operatorname{cosec} \theta = 2$

$$\Rightarrow \sin \theta + \frac{1}{\sin \theta} = 2$$

